



NANYANG PRIMARY SCHOOL

**SECOND SEMESTRAL EXAMINATION
2015**

PRIMARY 2

MATHEMATICS

DURATION: 1 HOUR 30 MINUTES

Section A	/ 40
Section B	/ 40
Section C	/ 20

Total: / 100

Name: _____ ()

Class: Primary 2 ()

Date: 26 October 2015

Parent's Signature: _____

Any query on marks awarded should be raised by **6 November 2015**.
We seek your understanding in this matter as any delay in the
confirmation of marks will lead to delays in the generation of results.

Parent's Signature: _____

**DO NOT OPEN THIS BOOKLET UNTIL YOU ARE TOLD TO DO SO.
FOLLOW ALL INSTRUCTIONS CAREFULLY.
ANSWER ALL QUESTIONS.**

Section A

Questions 1 to 20 carry 2 marks each.

For each question, four options are given.

One of them is the correct answer.

Choose the correct answer and write its number (1, 2, 3 or 4) in the brackets () provided. (Total: 40 marks)

1. What is the missing number in the number pattern below?

188, 198, _____, 218, 228

- | | | |
|---------|---------|-----|
| (1) 108 | (2) 200 | |
| (3) 208 | (4) 298 | () |

2. What is the value of 6 ones, 2 tens and 3 hundreds?

- | | | |
|---------|---------|-----|
| (1) 263 | (2) 326 | |
| (3) 362 | (4) 623 | () |

3. Subtract 140 from 843.

- | | | |
|---------|---------|-----|
| (1) 694 | (2) 703 | |
| (3) 739 | (4) 983 | () |

4. 7 groups of 2 is the same as _____.

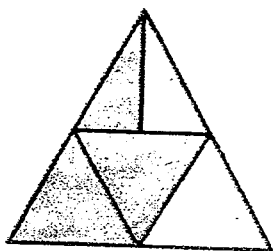
- | | |
|---------------------------------|-----|
| (1) $2 + 2$ | |
| (2) $7 + 2$ | |
| (3) $2 + 2 + 2 + 2 + 2 + 2 + 2$ | |
| (4) $7 + 7 + 7 + 7 + 7 + 7 + 7$ | () |

5. Which one of the following shows that $\frac{3}{5}$ of the figure is shaded?

(1)



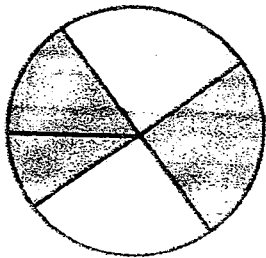
(2)



(3)

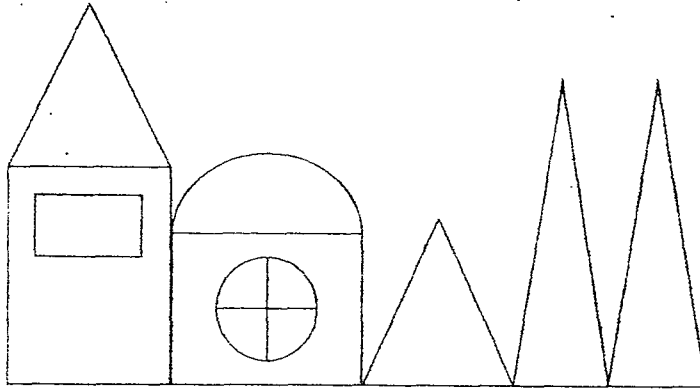


(4)



()

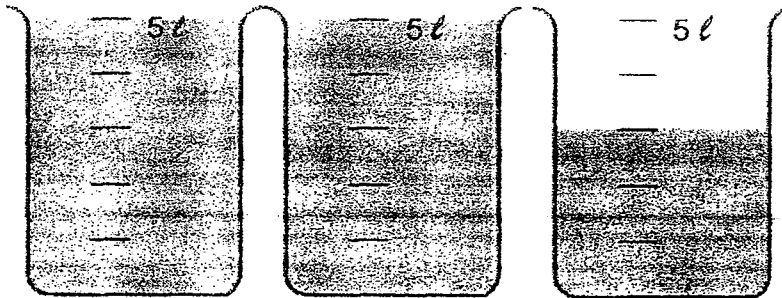
6. Look at the picture below.



How many triangles are there in the picture?

- | | | | | |
|-----|---|-----|---|----------|
| (1) | 1 | (2) | 2 | |
| (3) | 3 | (4) | 4 | () |

7. How many litres of water are there in the beakers shown below?



- | | | | | |
|-----|---|-----|----|----------|
| (1) | 5 | (2) | 10 | |
| (3) | 3 | (4) | 13 | () |

8. Wen Hui has 440 chocolates.
Fatimah has 245 chocolates fewer than Wen Hui.
Bernard has 37 chocolates fewer than Fatimah.
How many chocolates does Bernard have?

(1)	158	(2)	162	
(3)	195	(4)	205	()

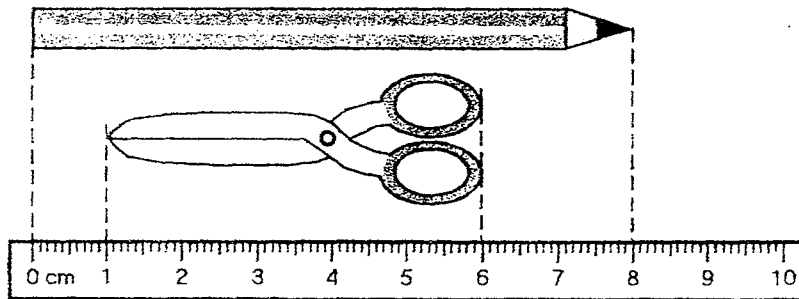
9. Miss Lim gave some paper flowers to 5 pupils.
Each pupil received 4 paper flowers.
How many paper flowers did Miss Lim give altogether?

(1)	1	(2)	9	
(3)	20	(4)	24	()

10. There were 2 red bags and 3 blue bags.
35 marbles were packed equally into all the bags.
How many marbles were there in each bag?

(1)	5	(2)	7	
(3)	30	(4)	40	()

11. Measure the objects using the ruler given below.



How much longer is the length of the pencil than the length of the pair of scissors?

- (1) 5 cm (2) 2 cm
(3) 3 cm (4) 7 cm ()

12. Look at Jane's holiday schedule as shown below.

Time	Activity
8.00 a.m. – 8.30 a.m.	Breakfast
8.30 a.m. – 9.00 a.m.	Reading
9.00 a.m. – 9.30 a.m.	Reading
9.30 a.m. – 10.00 a.m.	Drawing
10.00 a.m. – 10.30 a.m.	Swimming
10.30 a.m. – 11.00 a.m.	Swimming
11.00 a.m. – 11.30 a.m.	Swimming

Which activity lasted for an hour?

- (1) Breakfast (2) Drawing
(3) Reading (4) Swimming ()

13. 2 files cost \$20.
3 books cost \$24.
How much more money does a file cost than a book?

(1) \$10	(2) \$2	
(3) \$8	(4) \$4	()

14. Rachel ran 220 m on Monday.
On Tuesday, she ran 320 m.
On Wednesday, she ran 420 m and so on.
How far did she run on Friday?

(1) 100 m	(2) 400 m	
(3) 520 m	(4) 620 m	()

15. The sum of 2 numbers is 739.
The bigger number has 5 tens, 4 hundreds and 3 ones.
What is the smaller number?

(1) 286	(2) 692	
(3) 789	(4) 792	()

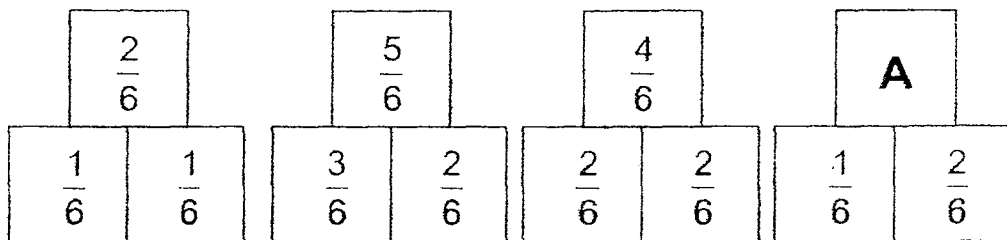
16. 5 eggs are used to bake 2 similar cakes.
How many eggs are needed to bake 8 such cakes?

(1) 40	(2) 20
(3) 15	(4) 4

17. A baker had 35 kg of flour at first.
He bought more flour and used 145 kg of it.
He had 26 kg of flour left.
How many kilograms of flour did he buy?

- (1) 119 (2) 136
(3) 180 (4) 206 ()


18.



What is the value of A?


- (1) $\frac{1}{6}$ (2) $\frac{3}{6}$
(3) $\frac{1}{12}$ (4) $\frac{3}{12}$ ()

19. Mary bought 3 of the items as shown below.
She paid with a fifty-dollar note and received 3 ten-dollar
notes as change.
Mary did not buy a _____



- | | | |
|---------------|--------------------|-----------|
| (1) Bag | (2) Box of crayons | |
| (3) Storybook | (4) T-shirt | () |

20. Jason buys a box of chocolate for \$4.20.
He gives the cashier one five-dollar note.
The cashier gives him his change using the **smallest** number of coins possible.
The coins available in the cashier's box are as shown below.



How many coins does Jason receive?

- (1) 5
(3) 3

- (2) 2
(4) 4

()

Section B

Questions 21 to 40 carry 2 marks each.

Write your answers in the spaces provided.

Give your answer in the units stated.

(Total: 40 marks)

21a) Write one thousand in numerals.

Answer : _____

b) Write six hundred and nine in numerals.

Answer : _____

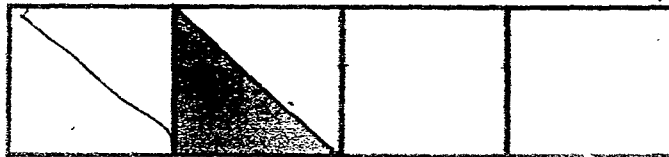
22. Arrange the following numbers in order, starting from the smallest.

299, 922, 292, 929

23. Rosie uses 3 m of cloth to make one dress.
How much cloth does she need to make 5 such dresses?

Answer : _____ m

24. What fraction of the figure is shaded?

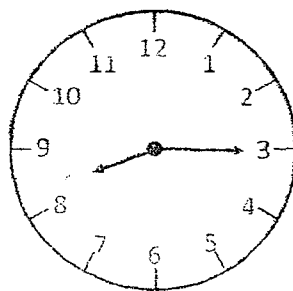


Answer : _____

25. Arrange the following fractions in order.
Begin with the greatest.

$\frac{1}{9}$,	$\frac{1}{2}$,	$\frac{1}{11}$,	$\frac{1}{5}$
---------------	---	---------------	---	----------------	---	---------------

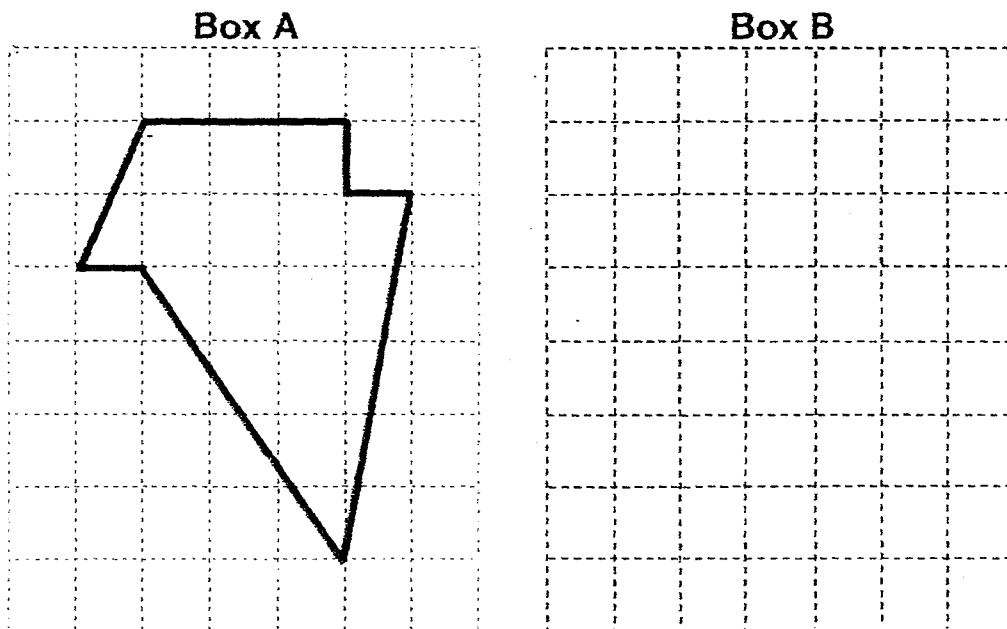
26. The clock below shows the time Muthu goes for his swimming lesson in the morning.



What time does Muthu go for his swimming lesson?
Write the time in a.m. or p.m.

Answer : _____

27. Look at the figure below.
Copy the figure in Box A onto the square grid of Box B.



28. Bob has the amount of money as shown below.
How much money does he have altogether?



Answer : \$ _____

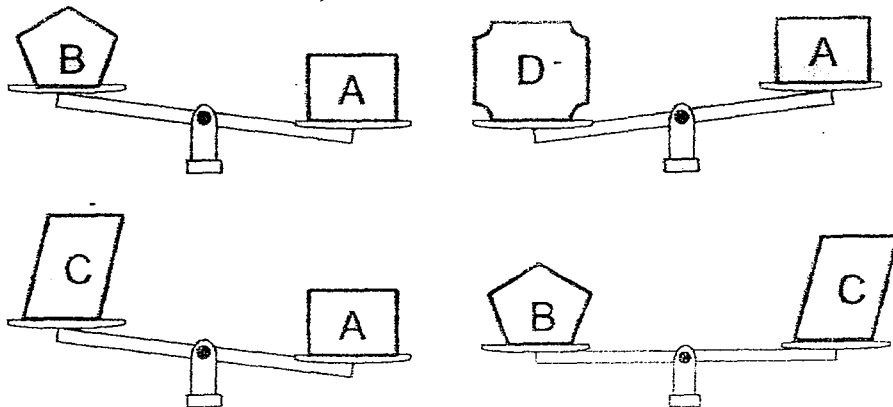
29. Sonia has 156 beads.
Xuan Hui has 275 beads more than Sonia.
How many beads does Xuan Hui have?

Answer : _____

30. There were 3 buttons on each shirt.
Mrs Dharani sewed a total of 27 buttons on some shirts.
How many such shirts did she sew the buttons on?

Answer : _____

31. Look at the picture below.



Which object is the heaviest?

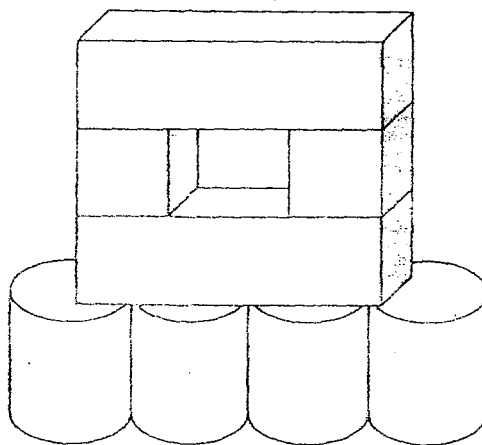
Answer : _____

32. $\frac{1}{7} + \boxed{B} = \frac{5}{7}$

What is the value of B?

Answer : _____


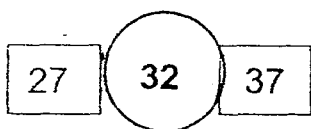
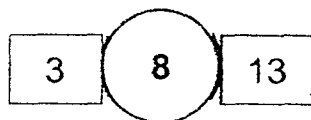
33. Look at the figure below.



Fill in the blanks.

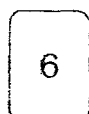
There are _____ cylinders and _____ cubes.

34. What is the missing number?



Answer : _____

35. How many different 3-digit even numbers can be formed using the cards below?

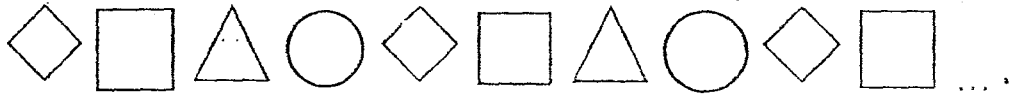


Answer : _____

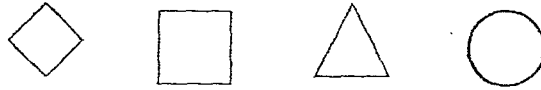
36. A book has 699 pages.
Zhi Ming finished reading the book in 2 weeks.
He read 201 pages in the first week.
How many more pages did he read in the second week than in the first week?

Answer : _____

37. Look at the pattern below.



What is the 20th shape in the above pattern?
Circle the shape.

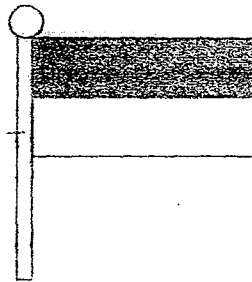


38. Class 2P enters a competition to design a flag as shown below.

They are given 3 colours to choose from: blue, red and green.

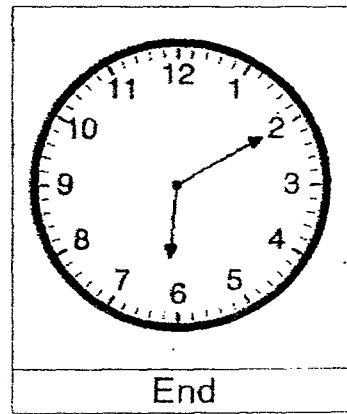
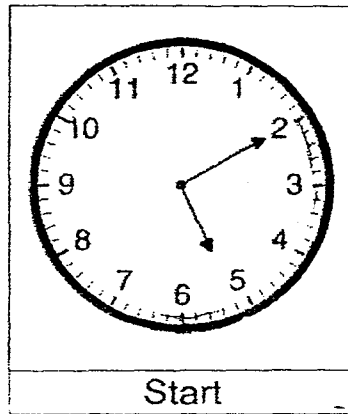
The flag must have two colours.

How many different flags can the class design?



Answer : _____

39. The clocks below show the starting time and ending time of the Alvin's violin lesson.



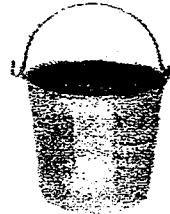
He had a break for 10 minutes during his lesson.
How long did he play the violin?

Answer : _____ min

40. Ahmad wanted to fill a fish tank with water using some big pails and some small pails.
Each time, the water in the pail is filled to the brim.
He used a total of 8 pails to fill the fish tank with 28 ℓ of water.



Small pail
3-litre



Big pail
5-litre

How many big pails did Ahmad use?

Answer : _____

Section C

Questions 41 to 45 carry 4 marks each.

Do these word problems carefully.

Show your working clearly in the space provided for each question.

(Total: 20 marks)

41. A shop had 150 pencils.
Ai Mei bought 126 pencils from the shop.

(a) How many pencils were left in the shop?

_____ pencils were left in the shop.

- (b) Pencils were sold in packets of threes.
Vanessa wanted to buy 21 pencils.
How many packets of pencils did Vanessa want to buy?

Vanessa wanted to buy _____ packets of pencils.

42. A dress cost \$105 and a shirt cost \$89.

- (a) How much money did the dress and the shirt cost altogether?

The dress and the shirt cost \$_____ altogether.

- (b) How much more money did the dress cost than the shirt?

The dress cost \$_____ more than the shirt.

43. Betty had some stamps at first.
She gave 432 stamps to Jaya and Celina.
In the end, Betty had 275 stamps left.

(a) How many stamps did Betty have at first?

Betty had _____ stamps at first.

- (b) Jaya received 189 stamps from Betty.
How many stamps did Celina receive from Betty?

Celina received _____ stamps from Betty.

44. Peter had a rope.
He cut it into 3 equal pieces: Rope A, Rope B and Rope C.
The length of Rope B is 6 m.

- (a) What is the total length of Rope A, Rope B and Rope C?

The total length of Rope A, Rope B and Rope C is

_____ m at first.

- (b) Peter then further cut Rope B into 2 equal pieces: Rope X and Rope Y.
What is the length of Rope X?

Rope X is _____ m.

45. Tank A contained 8 ℓ of water.
Tank B contained 20 ℓ of water.

- (a) How much water must be poured out from Tank B into Tank C so that Tank A and Tank B would contain the same amount of water?

_____ ℓ of water must be poured out from Tank B into Tank C so that both tanks would contain the same amount of water.

- (b) 24 ℓ of water was poured from Tank D into Tank A.
Both tanks had the same volume of water in the end.
How much water was there in Tank D in the end?

There was _____ ℓ of water in Tank D in the end.

☺ **End of Paper** ☺
Please Check Carefully

EXAM PAPER 2015**LEVEL : PRIMARY 2****SCHOOL : NANYANG PRIMARY SCHOOL****SUBJECT : MATHEMATICS****TERM : SA2**

Q1	Q2	Q3	Q4	Q5	Q6	Q7	Q8	Q9	Q10
3	2	2	3	3	4	4	3	3	2
Q11	Q12	Q13	Q14	Q15	Q16	Q17	Q18	Q19	Q 20
3	3	2	4	1	2	2	2	3	3

Q21a. 1000 Q21b. 609

Q22. 292, 299, 922, 929

Q23. 15m Q24. $\frac{1}{8}$ Q25. $\frac{1}{2}$, $\frac{1}{5}$, $\frac{1}{9}$, $\frac{1}{11}$

Q26. 8.15am

Q27. SEE PICTURE

Q28. \$8.20 Q29. 432 $\rightarrow 274+156=431$ Q30. $9 \rightarrow 27 \div 3 = 9$ Q31. D Q32. $\frac{4}{7}$

Q33. There are 4 cylinders and 2 cubes.

Q34. 54 Q35. 3 Q36. $297 \rightarrow 498 - 201 = 297$

Q37. SEE PICTURE

Q38.6 Q39. 50 minutes Q40.2

Q41a. 24 pencils were left in the shop. $\rightarrow 150 - 126 = 24$ Q41b. 7 packets of pencils $\rightarrow 21 \div 3 = 7$ Q42a. \$184 $\rightarrow 105 + 89 = 194$ Q42b. \$16 more than the shirt. $\rightarrow 105 - 89 = 16$ Q43a. 797 $\rightarrow 275 + 432 = 707$ Q43b. $243 \rightarrow 432 - 189 = 243$

Q44a. $18 \div 3 = 6$

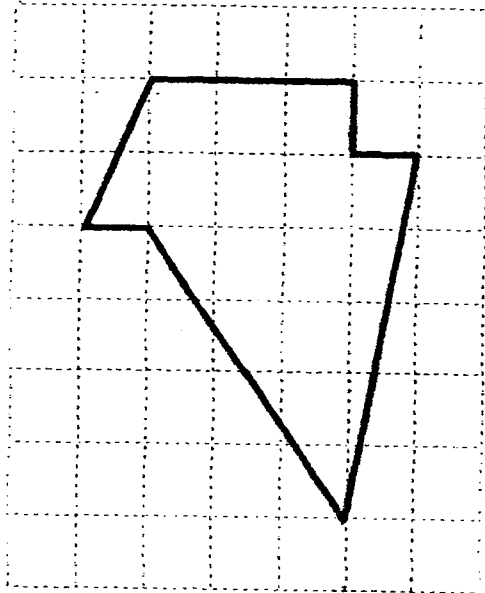
Q44b. $3 \times 2 = 6$

Q45a. $20 - 8 = 12$

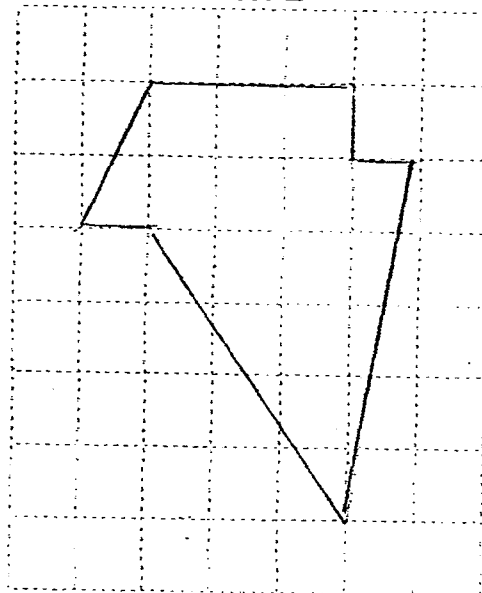
Q45b. $8 + 24 = 32$ litre

Q27


Box A



Box B



Q37 Look at the pattern below.



What is the 20th shape in the above pattern?

Circle the shape.

$20 \div 4 = 5$, 2nd shape

